

Série : Les maths


Combien de fruits  
en tout ?



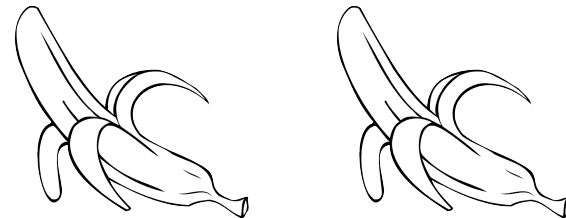
+



Combien de fruits  
en tout ?




+



Combien de fruits  
en tout ?



+

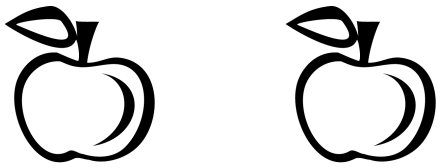


+

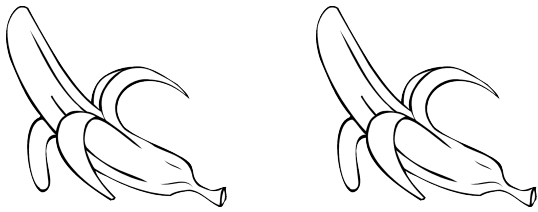


1 ananas et 1 poire.

Combien de fruits en tout ?




+



2 pommes et 2 bananes.

Combien de fruits en tout ?



+



3 ananas et 3 pommes.

Combien de fruits en tout ?